




DR. VIRENDRA SWARUP PUBLIC SCHOOL, KALYANPUR

SESSION 2023 -24

# Winter Holiday Homework

## Class - UKG



Name: \_\_\_\_\_



Complete the following: -

1. How many months are there in a year?

\_\_\_\_\_

2.  $18 - 5 =$  \_\_\_\_\_

3. Put these numbers in order starting with the smallest.

15, 9, 7, 10

\_\_\_\_\_, \_\_\_\_\_, \_\_\_\_\_, \_\_\_\_\_

4. Circle the smallest number.

18      23

5.  $3 \times 10 =$  \_\_\_\_\_

6. What day comes after Wednesday?

7.  $10 + 6 =$  \_\_\_\_\_

8. Circle the biggest number.

21      24

9. What comes after 19?

\_\_\_\_\_

10. Fill in the missing numbers.

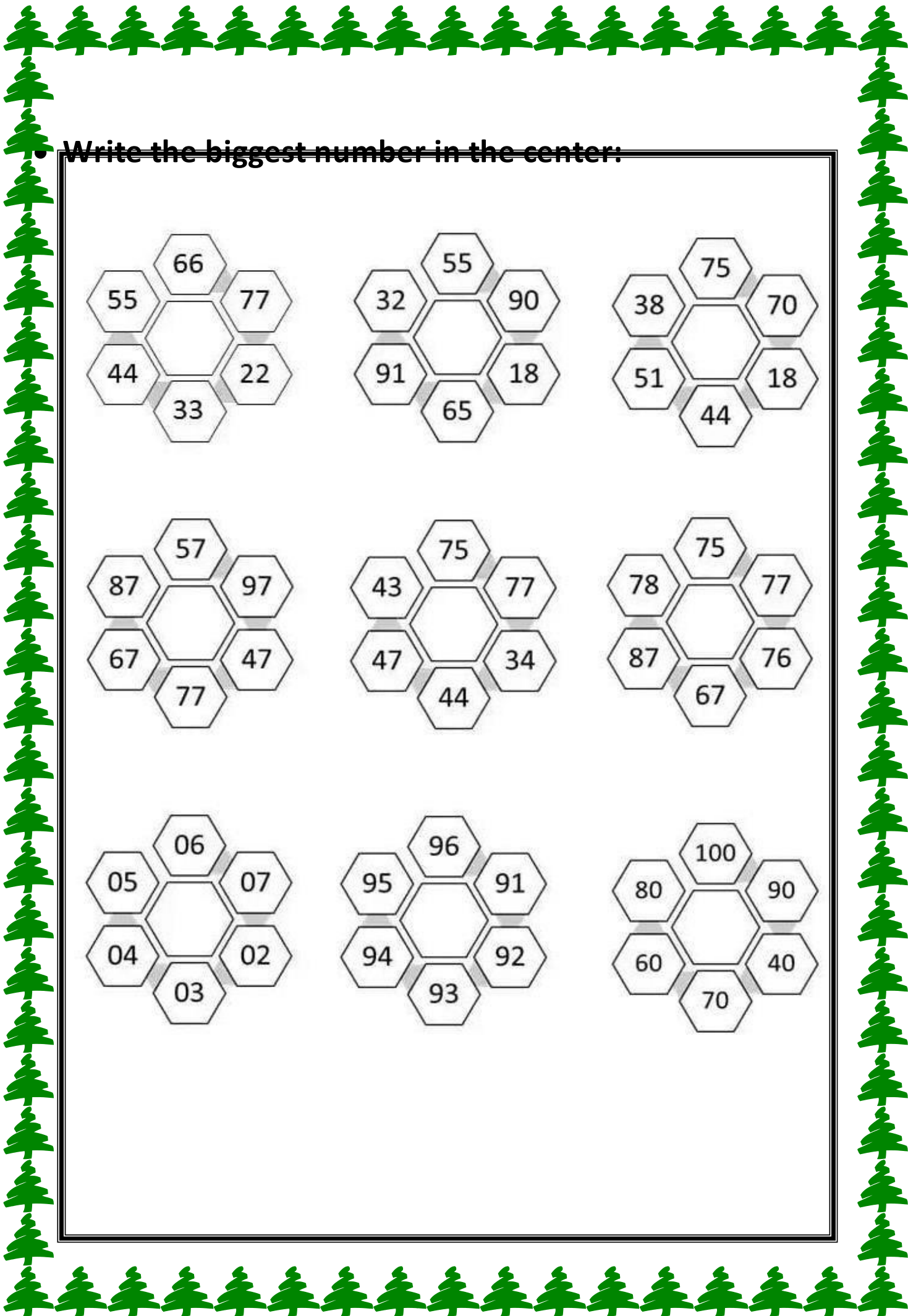
9, \_\_\_\_\_, \_\_\_\_\_, 12, 13, \_\_\_\_\_

11. 5 more than 8 is \_\_\_\_\_

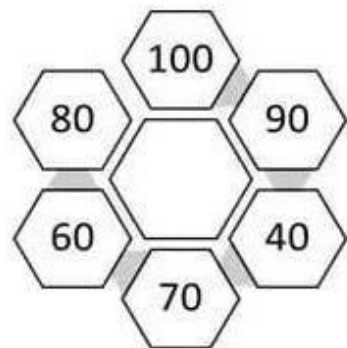
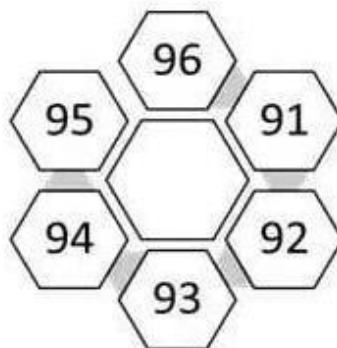
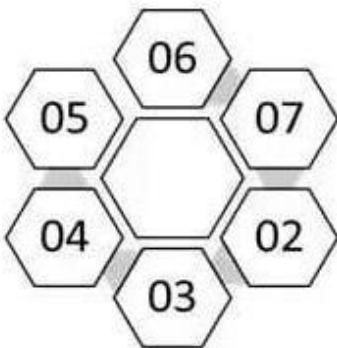
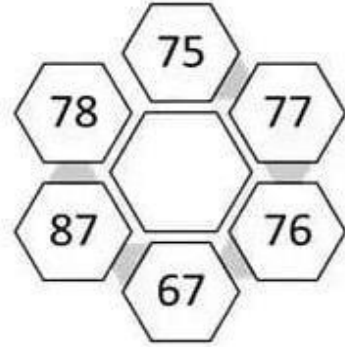
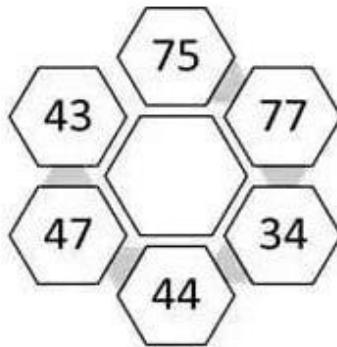
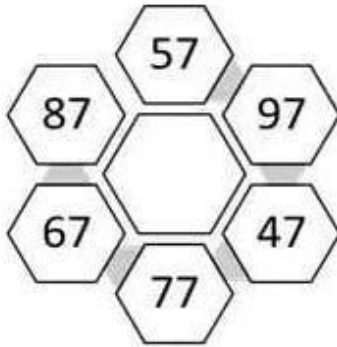
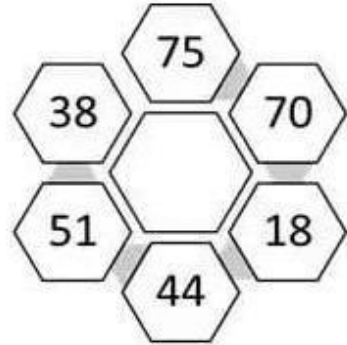
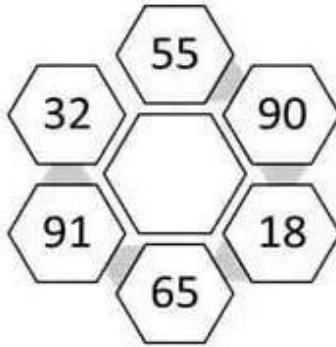
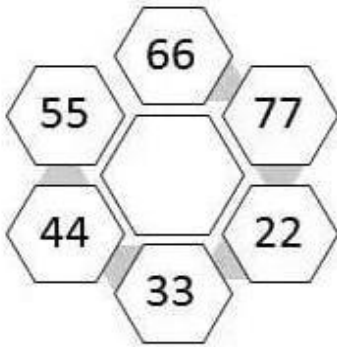
12. What is this shape?



\_\_\_\_\_



Write the biggest number in the center:



• Addition:-

$$\begin{array}{r} 24 \\ + 14 \\ \hline \end{array}$$

$$\begin{array}{r} 36 \\ + 41 \\ \hline \end{array}$$

$$\begin{array}{r} 56 \\ + 33 \\ \hline \end{array}$$

$$\begin{array}{r} 82 \\ + 16 \\ \hline \end{array}$$

$$\begin{array}{r} 50 \\ + 39 \\ \hline \end{array}$$

$$\begin{array}{r} 44 \\ + 22 \\ \hline \end{array}$$

$$\begin{array}{r} 72 \\ + 20 \\ \hline \end{array}$$

$$\begin{array}{r} 11 \\ + 15 \\ \hline \end{array}$$

$$\begin{array}{r} 65 \\ + 23 \\ \hline \end{array}$$

$$\begin{array}{r} 30 \\ + 60 \\ \hline \end{array}$$

$$\begin{array}{r} 64 \\ + 34 \\ \hline \end{array}$$

$$\begin{array}{r} 28 \\ + 61 \\ \hline \end{array}$$

$$\begin{array}{r} 22 \\ + 5 \\ \hline \end{array}$$

$$\begin{array}{r} 54 \\ + 34 \\ \hline \end{array}$$

$$\begin{array}{r} 61 \\ + 26 \\ \hline \end{array}$$

$$\begin{array}{r} 90 \\ + 9 \\ \hline \end{array}$$

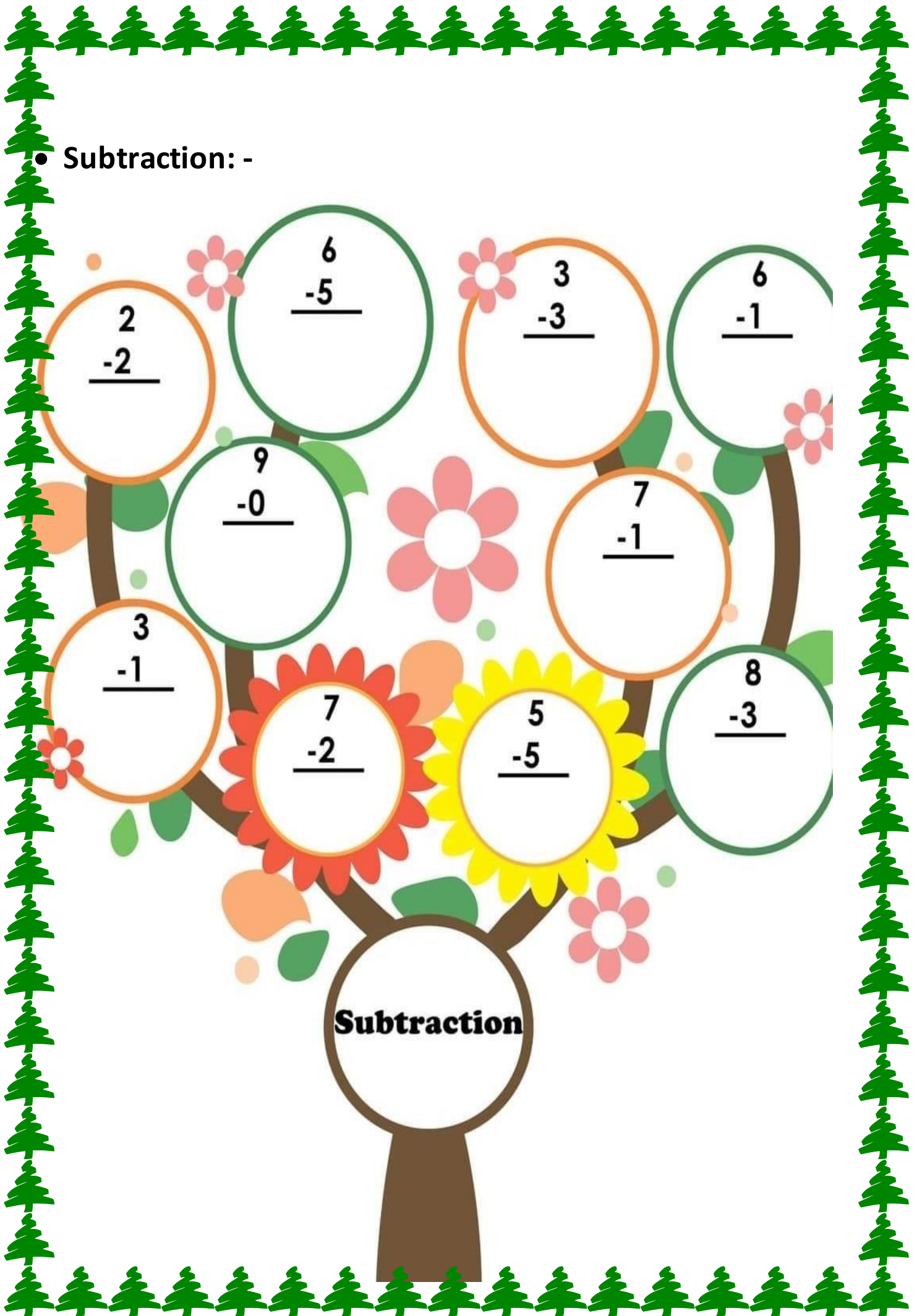
$$\begin{array}{r} 38 \\ + 30 \\ \hline \end{array}$$

$$\begin{array}{r} 84 \\ + 11 \\ \hline \end{array}$$

$$\begin{array}{r} 27 \\ + 52 \\ \hline \end{array}$$

$$\begin{array}{r} 63 \\ + 35 \\ \hline \end{array}$$





• Subtraction: -

$$\begin{array}{r} 2 \\ -2 \\ \hline \end{array}$$

$$\begin{array}{r} 6 \\ -5 \\ \hline \end{array}$$

$$\begin{array}{r} 3 \\ -3 \\ \hline \end{array}$$

$$\begin{array}{r} 6 \\ -1 \\ \hline \end{array}$$

$$\begin{array}{r} 9 \\ -0 \\ \hline \end{array}$$

$$\begin{array}{r} 7 \\ -1 \\ \hline \end{array}$$

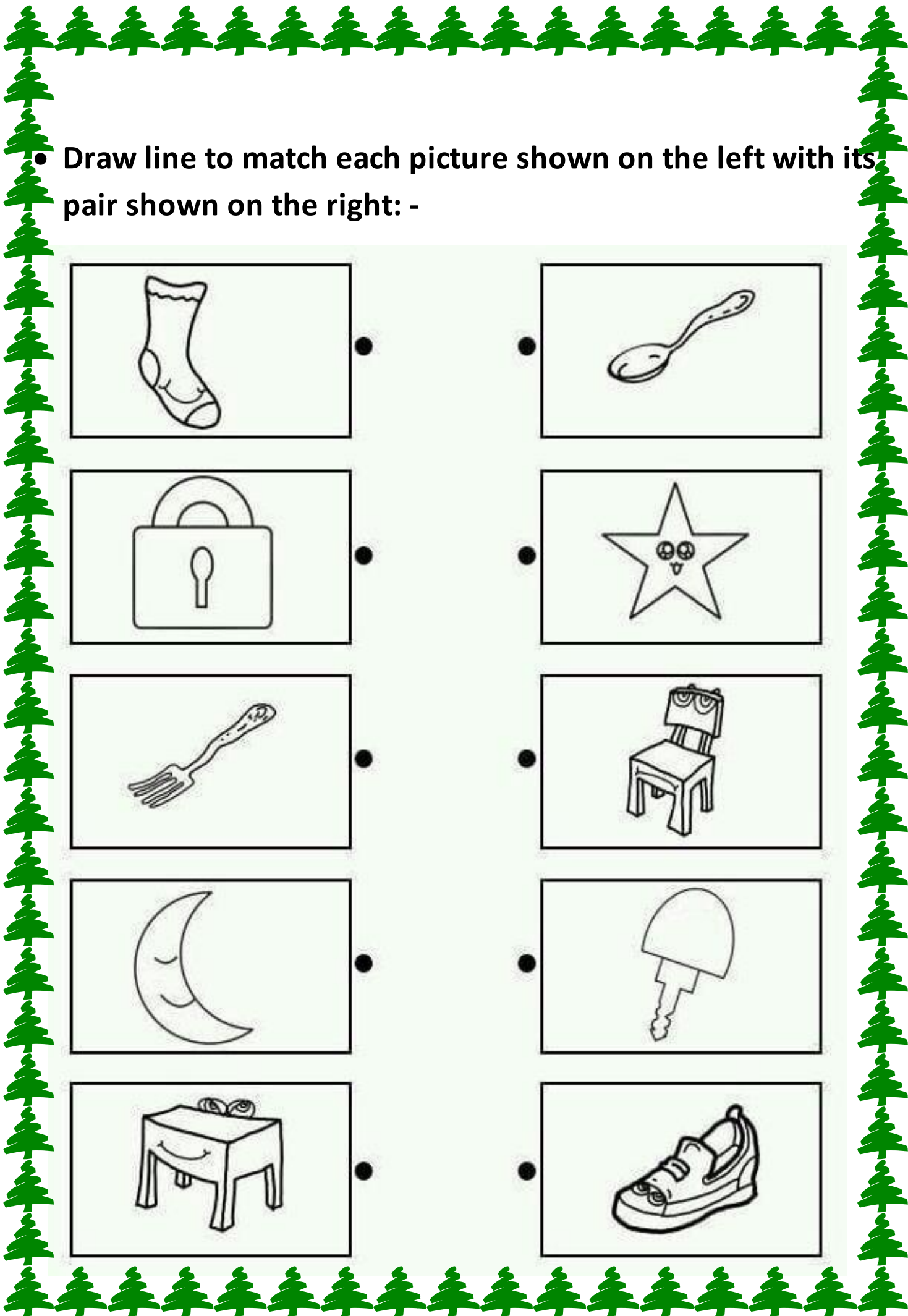
$$\begin{array}{r} 3 \\ -1 \\ \hline \end{array}$$

$$\begin{array}{r} 7 \\ -2 \\ \hline \end{array}$$



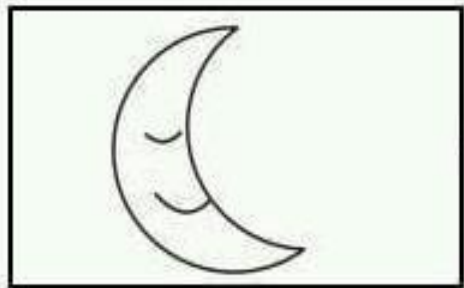
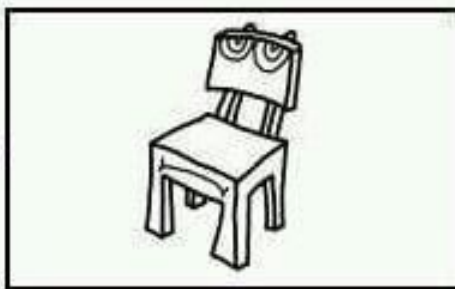
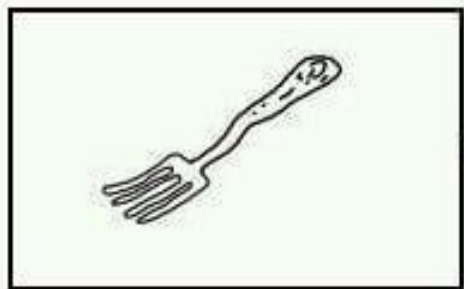
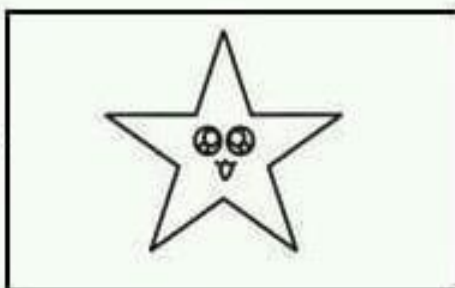
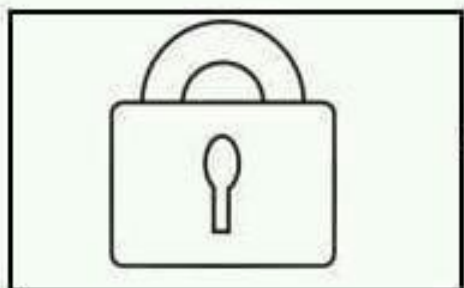
$$\begin{array}{r} 5 \\ -5 \\ \hline \end{array}$$

$$\begin{array}{r} 8 \\ -3 \\ \hline \end{array}$$

**Subtraction**



• Draw line to match each picture shown on the left with its pair shown on the right: -



• Fil in the missing letters: -

## Days, months and seasons

Complete these spellings.

### Days



M\_nd\_y

Tu\_s\_ay



We\_ne\_day

Thur\_da\_



F\_id\_y

\_atu\_day

S\_n\_ay



### Months



J\_nua\_y

F\_br\_ary

Ma\_c\_



A\_ri\_

M\_y

\_un\_



J\_l\_

A\_g\_st

S\_pte\_ber



O\_to\_er

\_ovemb\_r

D\_ce\_ber



### Seasons

s\_rin\_

s\_m\_er



a\_tu\_n

w\_nte\_





Fill in the missing letters: -



\_\_ion



\_\_eer



\_\_ouse



\_\_olf



\_\_at



\_\_abbit




\_\_anda











\_\_ox

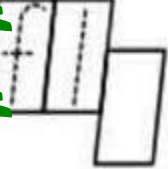

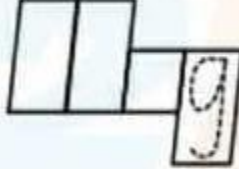



• Read and write the given word:-

 <p>flute</p>	flip _____	flip _____
	fly _____	fly _____
	flag _____	flag _____
	flat _____	flat _____
	flop _____	flop _____

 <p>__ ip</p>	 <p>__ ag</p>	 <p>__ ap</p>	 <p>__ y</p>
---	--	---	---

 <p>__ ush</p>	 <p>__ ower</p>	 <p>__ oat</p>	 <p>__ eas</p>
---	--	--	---

			
---	---	---	--

The flag is flapping.





The \_\_\_\_\_




चित्रों के नाम लिखकर अनुच्छेद पूरा करो।

एक  ..... था। घर की  .....


..... पर  ..... के पेड़ की छाया

थी। राम छाया में बैठकर  .....


पढ़ता था। एक बार एक  .....

राम के ऊपर गिरा। राम के  .....

खराब हो गए। राम  ..... पर

जाकर नहाया। फिर  .....

छा गए। पानी बरसा। राम ने बारिश में

एक  ..... रख दिया। टब

भर गया।



सही मात्रा वाला शब्द चुनकर खाली जगह में लिखिये:-

	मीत्र	मित्र	_____
	पिता	पीता	_____
	गिनती	गिनति	_____
	दुध	दूध	_____
	फूल	फुल	_____
	केला	कैला	_____
	बैल	बेल	_____
	औखली	ओखली	_____
	ओरत	औरत	_____



• Colour the given picture.

MERRY CHRISTMAS



